

1. 올림이 없는 (세 자리 수) × (한 자리 수)

[01 ~ 09] 계산해 보세요.

01
$$\begin{array}{r} 221 \\ \times 3 \\ \hline \end{array}$$

02
$$\begin{array}{r} 142 \\ \times 2 \\ \hline \end{array}$$

03
$$\begin{array}{r} 212 \\ \times 4 \\ \hline \end{array}$$

04
$$\begin{array}{r} 121 \\ \times 2 \\ \hline \end{array}$$

05
$$\begin{array}{r} 342 \\ \times 2 \\ \hline \end{array}$$

06
$$\begin{array}{r} 323 \\ \times 3 \\ \hline \end{array}$$

07
$$\begin{array}{r} 203 \\ \times 3 \\ \hline \end{array}$$

08
$$\begin{array}{r} 214 \\ \times 2 \\ \hline \end{array}$$

09
$$\begin{array}{r} 443 \\ \times 2 \\ \hline \end{array}$$

[10 ~ 13] 빈칸에 알맞은 수를 써넣으세요.

10 $111 \times 6 = \square$

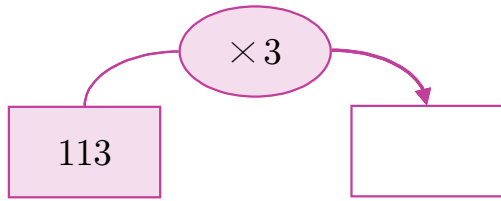
11 $121 \times 4 = \square$

12 $231 \times 3 = \square$

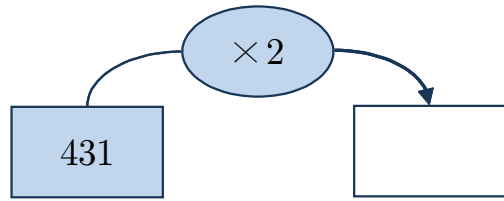
13 $314 \times 2 = \square$

[14~17] 빈칸에 알맞은 수를 써넣으세요.

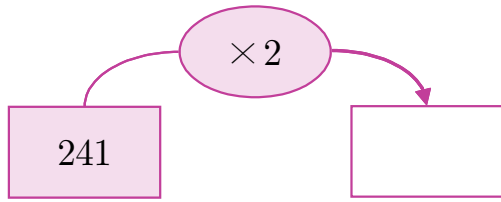
14



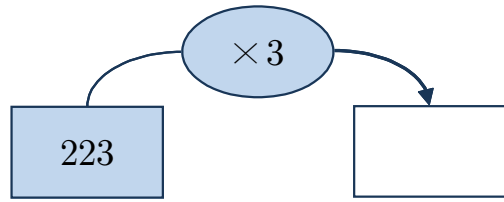
15



16

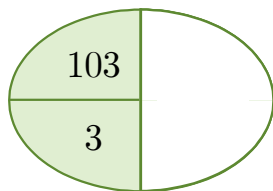


17

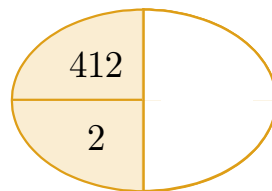


[18~19] 빈칸에 두 수의 곱을 써넣으세요.

18



19



20 계산 결과를 찾아 선으로 이어 보세요.

312×3 •

214×2 •

• 428

• 448

• 936

1. 올림이 없는 (세 자리 수) × (한 자리 수)

[01 ~ 09] 계산해 보세요.

$$\begin{array}{r} 01 \quad 221 \\ \times \quad 3 \\ \hline 663 \end{array}$$

$$\begin{array}{r} 02 \quad 142 \\ \times \quad 2 \\ \hline 284 \end{array}$$

$$\begin{array}{r} 03 \quad 212 \\ \times \quad 4 \\ \hline 848 \end{array}$$

$$\begin{array}{r} 04 \quad 121 \\ \times \quad 2 \\ \hline 242 \end{array}$$

$$\begin{array}{r} 05 \quad 342 \\ \times \quad 2 \\ \hline 684 \end{array}$$

$$\begin{array}{r} 06 \quad 323 \\ \times \quad 3 \\ \hline 969 \end{array}$$

$$\begin{array}{r} 07 \quad 203 \\ \times \quad 3 \\ \hline 609 \end{array}$$

$$\begin{array}{r} 08 \quad 214 \\ \times \quad 2 \\ \hline 428 \end{array}$$

$$\begin{array}{r} 09 \quad 443 \\ \times \quad 2 \\ \hline 886 \end{array}$$

[10 ~ 13] 빈칸에 알맞은 수를 써넣으세요.

10 $111 \times 6 =$

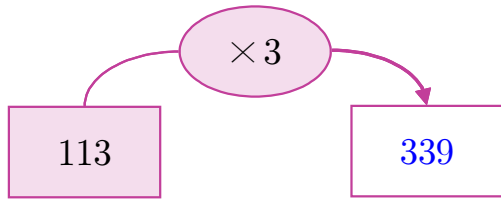
11 $121 \times 4 =$

12 $231 \times 3 =$

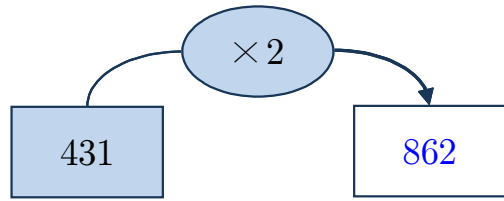
13 $314 \times 2 =$

[14~17] 빈칸에 알맞은 수를 써넣으세요.

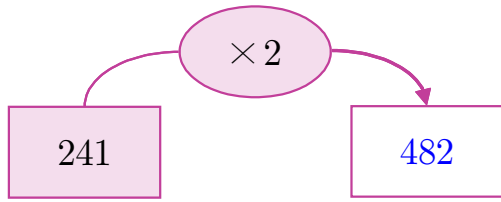
14



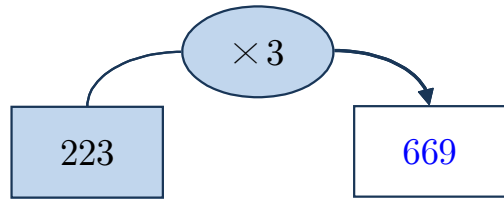
15



16

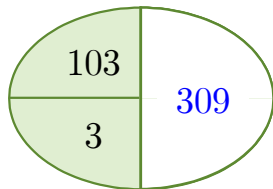


17

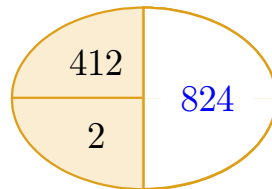


[18~19] 빈칸에 두 수의 곱을 써넣으세요.

18



19



20 계산 결과를 찾아 선으로 이어 보세요.

